

Name: _____

Date: _____

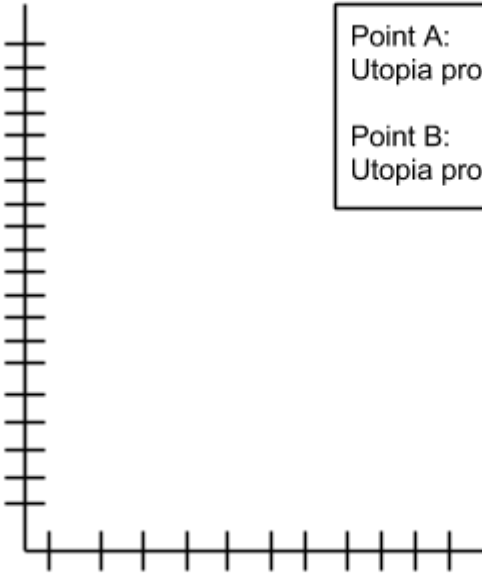
Activity 1

Creating Production Possibility Frontiers

Instructions: Using the data below, draw four production possibility frontiers. Assume that we are moving in units of *ten* for all four graphs.

Production of cars

Production in Utopia: Graph 1



Point A:
Utopia produces 50 trucks and 0 cars

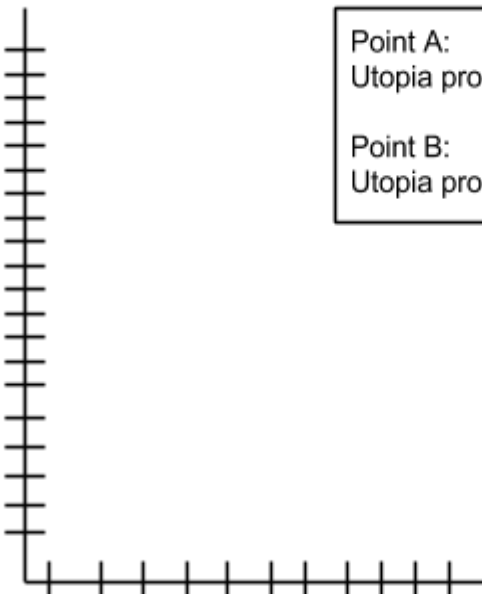
Point B:
Utopia produces 150 cars and 0 trucks

moving in units of *ten* for all four graphs.

Production of trucks

Production of cars

Production in Utopia: Graph 2



Point A:
Utopia produces 100 trucks and 0 cars

Point B:
Utopia produces 100 cars and 0 trucks

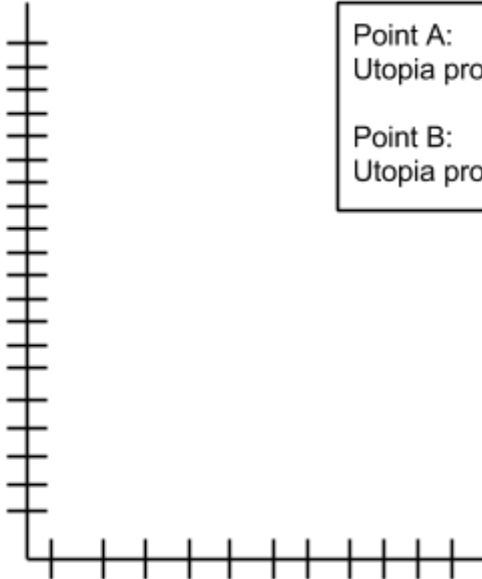
Production of trucks

Name: _____

Date: _____

Production
of cars

Production in Utopia: Graph 3



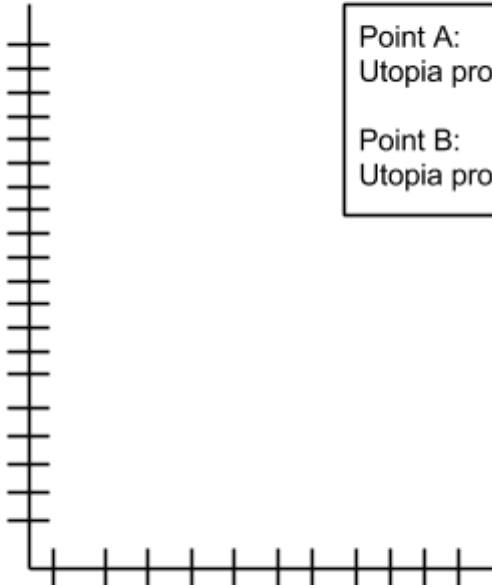
Point A:
Utopia produces 20 trucks and 0 cars

Point B:
Utopia produces 200 cars and 0 trucks

Production
of trucks

Production
of cars

Production in Utopia: Graph 4



Point A:
Utopia produces 90 trucks and 0 cars

Point B:
Utopia produces 60 cars and 0 trucks

Production
of trucks